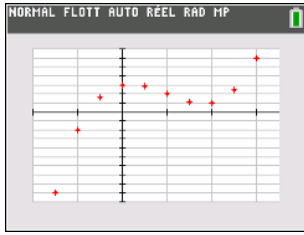
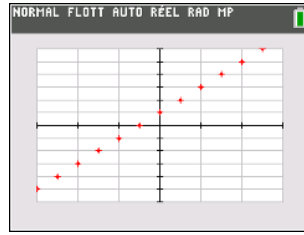


Exercice 01

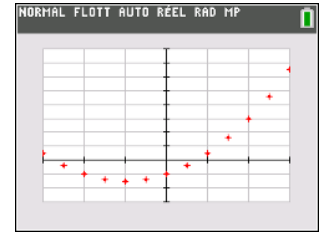
Pour chacun des nuages ci-après, **indiquer** d'après l'allure du nuage de points l'ajustement qui semble le plus pertinent.



1.



2.



3.